







1. Count the objects. Write the numbers and their names.

a.		<input type="text"/>	d.		<input type="text"/>
b.		<input type="text"/>	e.		<input type="text"/>
c.		<input type="text"/>	f.		<input type="text"/>

2. Connect the lines to form the numbers.

1

1

1

1

1

2

2

2

2

2

3

3

3

3

3

4

4

4

4

4

5

5

5

5

5

6

6

6

6

6

7

7

7

7

7

8

8

8

8

8

9

9

9

9

9

3. Count the objects and circle the correct number.



1 2 3 4 5



1 2 3 4 5



1 2 3 4 5



1 2 3 4 5






1 2 3 4 5



1 2 3 4 5

4. Match each group of objects with the correct number name.



Five

Seven

Three

Six

Eight

5. Put the numbers in order from smallest to biggest.

a.

4	2	5	1	3	6	7
---	---	---	---	---	---	---

↓

--	--	--	--	--	--	--

b.

7	4	9	5	6	3	8
---	---	---	---	---	---	---

↓

--	--	--	--	--	--	--

6. Put the numbers in order from biggest to smallest.

a.

3	8	5	6	2	7	4
---	---	---	---	---	---	---

↓

--	--	--	--	--	--	--

b.

1	6	3	5	7	4	2
---	---	---	---	---	---	---

↓

--	--	--	--	--	--	--

7. Write the numbers in increasing order.

a. 2, 4, 7, 3, 5 : _____

b. 9, 1, 6, 3, 8 : _____

c. 7, 1, 4, 6, 5 : _____

d. 3, 8, 2, 5, 4 : _____

8. Write the numbers in decreasing order.

a. 5, 7, 1, 2, 9 : _____

b. 8, 2, 3, 5, 4 : _____

c. 3, 1, 5, 2, 6 : _____

d. 7, 4, 6, 8, 9 : _____

9. Write the number names.

a. 9 : _____

c. 6 : _____

b. 4 : _____

d. 3 : _____

10. Write the numbers that come after.

a. 7 : _____

c. 8 : _____

b. 5 : _____

d. 1 : _____

11. Write the numbers that come before.

- a. 8 : _____
- b. 5 : _____
- c. 6 : _____
- d. 2 : _____
- e. 7 : _____
- f. 4 : _____

12. Write the numbers that come between.

- a. 4 and 6 : _____
- b. 7 and 9 : _____
- c. 5 and 7 : _____
- d. 1 and 3 : _____
- e. 2 and 4 : _____
- f. 6 and 8 : _____

13. Write the biggest number for each set of numbers.

a. 7, 6, 5, 9 : _____

b. 1, 3, 7, 8 : _____

c. 4, 6, 2, 1 : _____

d. 5, 2, 7, 3 : _____

14. Write the smallest number for each set of numbers.

a. 6, 7, 8, 9 : _____

b. 4, 5, 3, 2 : _____

c. 8, 6, 3, 4 : _____

d. 7, 6, 5, 9 : _____

15. Write the numbers for the following number names.

a. Nine : _____

b. Four : _____

c. Three : _____

d. Six : _____