

Numbers up to 1,000

1. Write the following numbers in expanded form. One has been done for you.

a. $998 = \underline{9}$ hundreds + $\underline{9}$ tens + $\underline{8}$ ones
 $= \underline{900} + \underline{90} + \underline{8}$

b. $769 = \underline{\quad}$ hundreds + $\underline{\quad}$ tens + $\underline{\quad}$ ones
 $= \underline{\quad} + \underline{\quad} + \underline{\quad}$

c. $219 = \underline{\quad}$ hundreds + $\underline{\quad}$ tens + $\underline{\quad}$ ones
 $= \underline{\quad} + \underline{\quad} + \underline{\quad}$

d. $868 = \underline{\quad}$ hundreds + $\underline{\quad}$ tens + $\underline{\quad}$ ones
 $= \underline{\quad} + \underline{\quad} + \underline{\quad}$

e. $534 = \underline{\quad}$ hundreds + $\underline{\quad}$ tens + $\underline{\quad}$ ones
 $= \underline{\quad} + \underline{\quad} + \underline{\quad}$

f. $473 = \underline{\quad}$ hundreds + $\underline{\quad}$ tens + $\underline{\quad}$ ones
 $= \underline{\quad} + \underline{\quad} + \underline{\quad}$

2. Write the number names for each of the following numbers.

| Numbers | Number Names |
|---------|--------------|
| 986 | |
| 614 | |
| 107 | |
| 895 | |
| 732 | |
| 321 | |
| 460 | |
| 259 | |
| 548 | |
| 873 | |

3. Write the numbers for each of the following number names.

| Number Names | Numbers |
|---------------------------|---------|
| Eight hundred ninety-five | |
| Six hundred ten | |
| Nine hundred forty-four | |
| Three hundred fifty-nine | |
| Seven hundred twenty-one | |
| Four hundred sixty-seven | |
| Five hundred six | |
| Nine hundred thirty-two | |
| Two hundred seventy-eight | |
| One hundred eighty-three | |

4. Fill in the blanks with smaller or bigger.

a. 255 is _____ than 525.

b. 875 is _____ than 578.

c. 369 is _____ than 639.

d. 413 is _____ than 143.

e. 799 is _____ than 977.

5. Put the following numbers in order, from smallest to biggest.

a. 659 748 875 318 →

b. 769 976 796 967 →

c. 452 585 648 495 →

d. 248 364 863 624 →

e. 399 684 418 486 →

6. Put the following numbers in order, from biggest to smallest.

a. 978 768 687 998 →

b. 304 335 612 575 →

c. 220 589 651 342 →

d. 687 355 845 420 →

e. 245 855 467 594 →

7. Fill in the next three numbers for each pattern.

a. 500 525 550 ...

b. 999 888 777 ...

c. 328 428 528 ...

d. 820 830 840 ...

e. 750 700 650 ...

f. 101 106 111 ...

g. 500 490 480 ...

h. 101 202 303 ...






i. 100 150 200 ...

j. 1000 999 998 ...

8. Fill in the blanks.

| | | | | | | | | | |
|-----|-----|-----|-----|-----|-----|-----|-----|-----|-----|
| 900 | 899 | | | | | | | | |
| 890 | | | | | 885 | | | | |
| | 879 | | | | | | 873 | | |
| | | | | 866 | | | | | |
| 860 | | | | | | | | | 851 |
| | | | 847 | | | | | | |
| | | 838 | | | | 834 | | | |
| 830 | | | | | | | | 822 | |
| | | | | | 815 | | | | |
| | 809 | | | | | | | | 801 |

9. Write the numbers and number names.

| Blocks | Numbers | Number Names |
|---|---------|--------------|
|  | | |
|  | | |
|  | | |
|  | | |
|  | | |

10. Write the number shown on each abacus.

